

# 7<sup>th</sup> and 8<sup>th</sup> Grade Math

## Review: Absolute Value and adding integers

Created with Doceri



For today's homework  
you will need to copy  
the following notes and exercises  
onto your own notebook paper.


Created with Doceri



← Heading

Notes: Absolute value

Integers = **negative** and **Positive**  
**numbers** **Numbers**



Absolute Value = Distance of an integer from 0.

$$|-2| = 2$$

units from 0

$$|2| = 2$$

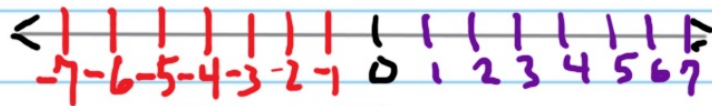
units from 0

Created with Doceri



Exercises

①  $|-5| = 5$



②  $|5| = 5$

③  $|3| = 3$

④  $|3| = 3$

⑤  $|-8| =$

⑥  $|9| =$

Created with Doceri



# Notes: Adding Integers



$$-4 + 5 = 1$$

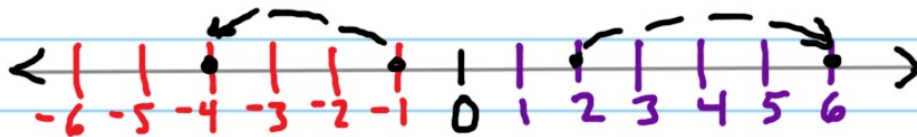
start      pos direction      end



$$3 + (-5) = -2$$

start      neg direction      end

Created with Doceri



$$-1 + (-3) = -4$$

start      neg dir      End

←

$$2 + 4 = 6$$

start      pos dir      end

→

$$5 + -3 = 2$$

$$-2 + 4 = 2$$

$$-5 + 7 = 2$$

$$-3 + 1 = -2$$

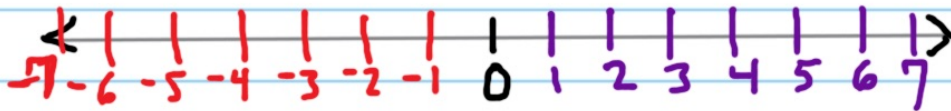
Created with Doceri



## Exercises

$$\textcircled{1} 4 + 3 = 7 \quad \textcircled{2} -4 + 3 = -1$$

$$\textcircled{3} 4 + (-3) = 1 \quad \textcircled{4} -4 + (-3) = -7$$



$$\textcircled{5} 2 + 3 = \quad \textcircled{6} -2 + 3 =$$

$$\textcircled{7} 2 + (-3) = \quad \textcircled{8} -2 + (-2) =$$

Created with Doceri

